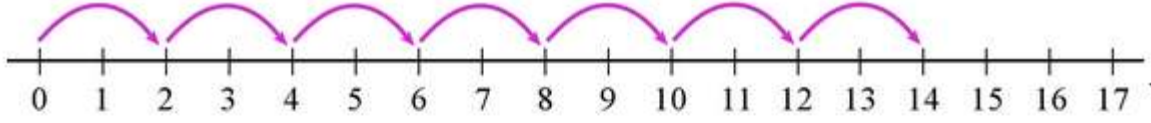


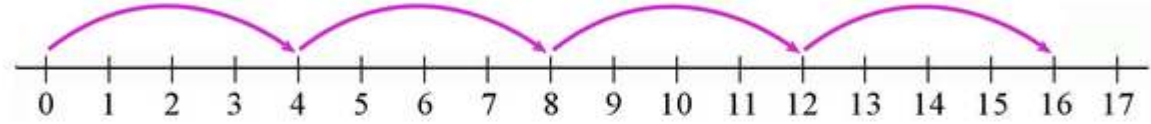
İsim : _____ Puan : _____

Öğretmen : _____ Tarih : _____

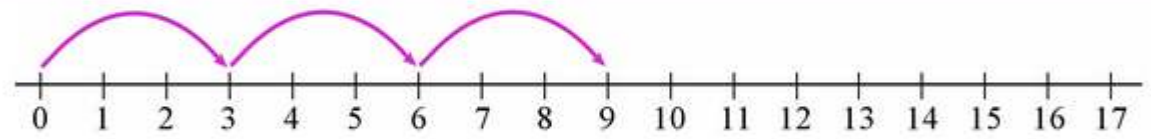
Sayı doğrusunda verilen işlemi ifade eden matematik cümlesini yazınız.



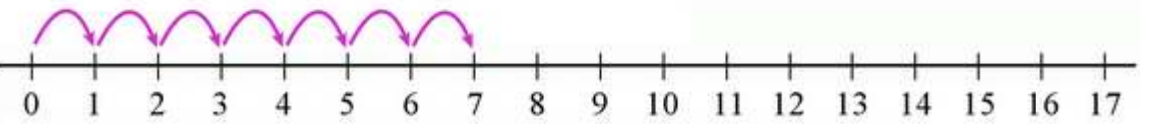
a. _____ × _____ = _____



b. _____ × _____ = _____




c. _____ × _____ = _____




d. _____ × _____ = _____

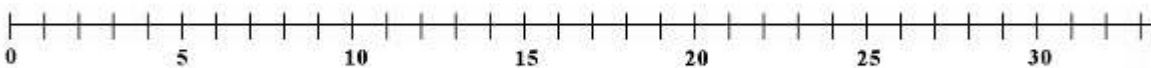
Verilen işlemi sayı doğrusunda çizerek gösteriniz.



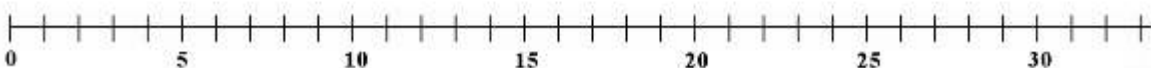
a. $6 \times 4 =$ _____



b. $5 \times 5 =$ _____



c. $6 \times 5 =$ _____



d. $7 \times 4 =$ _____